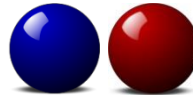


Year 3 Mental Arithmetic Paper 1

1) Fill in the missing number
5, 10, 15, 20, _____, 30

2) Find the sum of twelve and nine: _____


3) In a bag, there were 26 balls.
17 were red and the rest were blue.
How many were blue?



4) $24 \div \underline{\quad} = 6$

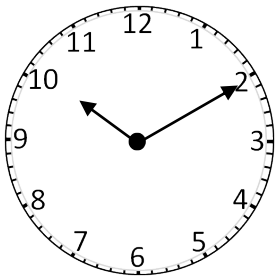
5) $4 \times 3 = \underline{\quad} \times 6$

6) What fraction of the shape is shaded?



Answer:

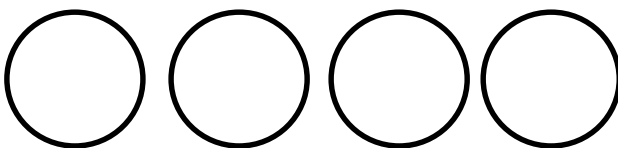
7) What will the time be in 25 minutes?



Answer:

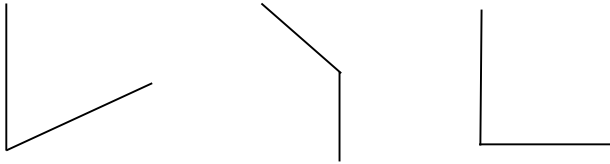
8) 1 Fifty + 2 Twenties + 4 Ones = _____

9) I have 4 different coins that add up to 18 pence.
Which 4 coins do I have?



10) 30 sweets are shared equally between 5 children.
How many sweets does each child get? _____

11) Put a ring around the right angle:



12)
$$\begin{array}{r} 164 \\ - 32 \\ \hline \end{array}$$

1) 25

2) 21

3) 9

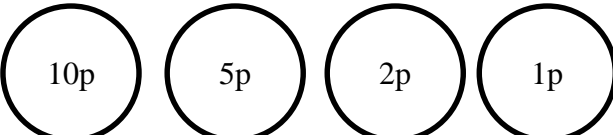
4) 4

5) 2


6) $\frac{7}{10}$

7) 10:35

8) 94

9) 

10) 6

11) 

12) 132