

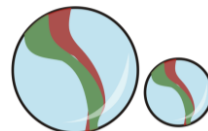
## Year 4 Mental Arithmetic Paper 2

1) Round 47 to the nearest ten \_\_\_\_\_

2)  $5 - 7 =$  \_\_\_\_\_

3) 
$$\begin{array}{r} 1741 \\ + \quad 85 \\ \hline \end{array}$$

4) Jimmy has 150 marbles. He gives 74 to Lizzie.  
How many does he have left? \_\_\_\_\_



5)  $12 \times 7 =$  \_\_\_\_\_

6) 63 sweets are shared equally between 9 people.  
How many sweets does each person get? \_\_\_\_\_



7) If:  $6 \times 2 = 12$   
Then:  $60 \times \square = 1200$

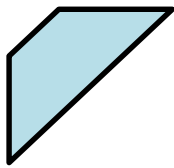
8) Which of these fractions is equivalent to  $\frac{1}{3}$  ?

$\frac{6}{9}$     $\frac{5}{12}$     $\frac{2}{6}$

9) What number is 1000 less than 4371? \_\_\_\_\_

10) Write  $\frac{1}{2}$  as a decimal: \_\_\_\_\_

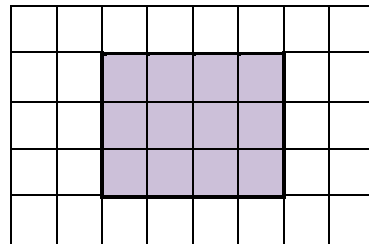
11) Draw the line of symmetry on this shape:



12) Find  $\frac{2}{5}$  of 25 \_\_\_\_\_

13) What is the area of this shape?

Answer = \_\_\_\_\_ cm<sup>2</sup>



14) Add together:  $\frac{2}{9} + \frac{3}{9} =$

15) How many grams in half a kilogram? \_\_\_\_\_ grams

16) Danielle has been skiing for 31 days. How long is that in weeks and days? \_\_\_\_\_ weeks and \_\_\_\_\_ days



## Answers

1) 50

2) -2

3) 1826

4) 76

5) 84

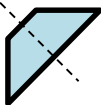
6) 7

7) 20

8)  $\frac{2}{6}$

9) 3371

10) 0.5

11) 

12) 10

13) 12cm<sup>2</sup>

14)  $\frac{5}{9}$

15) 500 grams

16) 4 weeks and 3 days



Revise and practice with our  
Year 4 Tests & Topic Sheets