


Year 3 Mental Arithmetic Paper 2

- 1) There are 20 bugs. Each bug has 6 legs.
How many legs altogether? _____



- 2) Put a tick in the box next to the **vertical** line:



3) $\frac{1}{5} + \frac{2}{5} = \frac{\square}{\square}$

4) $4 \times 8 = \underline{\hspace{2cm}}$

5)
$$\begin{array}{r} 321 \\ + 36 \\ \hline \end{array}$$

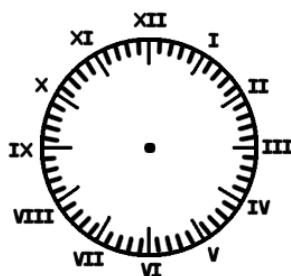
- 6) How much change will you get from a £2 coin?



Answer:

7) $12 + 8 = 25 - \square$

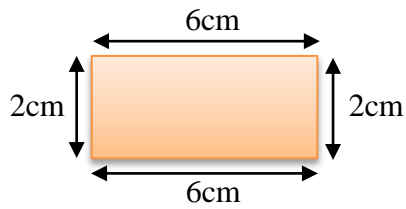
- 8) The little hand is pointing to the X. The big hand is pointing to IV.
What is the time?



9) $27 \div 3 =$ _____

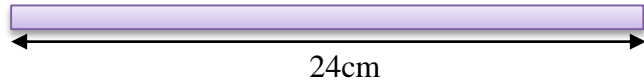
10) $\frac{1}{10}$ of 200 = _____

11) What is the perimeter of this shape?



Answer: _____ cm

12) This is Lucy's ribbon:



Katie's ribbon is twice as long.

How long is Katie's ribbon? _____ cm

Answers

1) 120

2) 

3) $\frac{3}{5}$

4) 32

5) 357

6) 60p

7) 5

8) 10:20

9) 9

10) 20

11) 16cm

12) 48cm