

**Year 1 Mental Arithmetic Paper 2**

1) Write the word for this number

11 \_\_\_\_\_


2) How much money?



3) Fill in the missing number:

$$9 - \square = 7$$

4) Colour half the dots



5) Find 1 less than 15


\_\_\_\_\_

6) Put a ring round the bigger number

25      31

7)  $6 + 4 =$  \_\_\_\_\_

8) How many dogs?



9) What comes next?

10 20 30 40 \_\_\_\_\_

10) Circle the shortest lamp



11) Put a ring around the name of this shape:

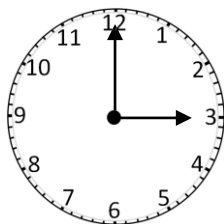
Circle

Square

Triangle



12) What is the time?




Answers

1) eleven

2) 8p

3) 2



5) 14

6) 25 **31**

7) 10

8) 7

9) 50



11) Triangle

12) 3:00 or 3 o'clock

Try our  
Key Stage 1  
Puzzle Book!

