


Year 1 Mental Arithmetic Paper 1

1) Colour 3 ducks:



2) How many flowers are there?



3) Fill in the missing number: 1 2 4 5

4) $2 + 2 =$ _____

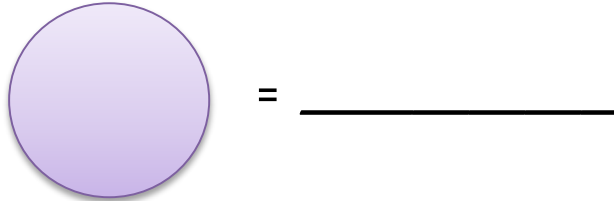
5) Bobby has 3 cats. His friend gives him 1 more cat. How many cats does he have? _____

6) Take away 3 sweets from the pile:

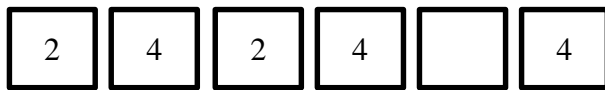


7) $4 - 1 =$ _____

8) What is this shape?



9) Fill in the missing number in this pattern:



10) Circle the taller giraffe



11) What month is Christmas? _____

12) Which is less, 6 or 4? _____

13) Colour the numbers that are less than 4

1 7 6 3 2 5

Answers



2) 4

3) 3

4) 4

5) 4

6) 3

7) 3

8) Circle

9) 2



11) December

12) 4

13) **1** 7 6 **3** **2** 5