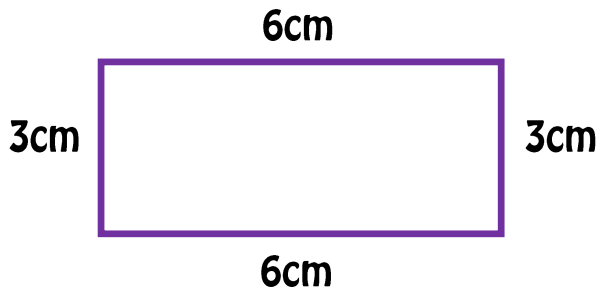


Perimeter

Perimeter is the distance around the whole shape. Add all the sides together to find the total distance.

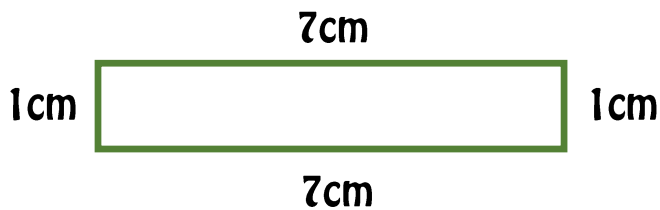
E.g.




$$3 + 6 + 3 + 6 = 18\text{cm}$$

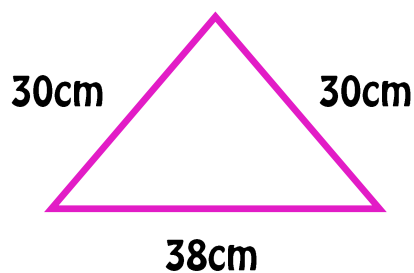
Now try these examples:

1)

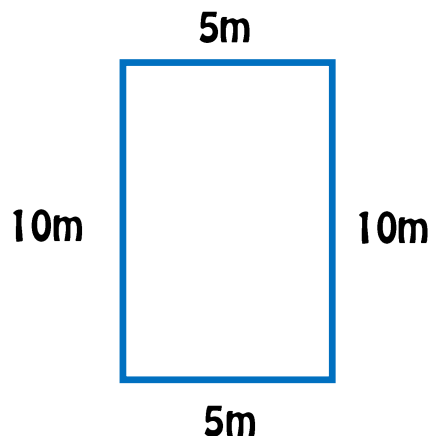


Handy  reminder:
When writing your answer check the units. Is the distance in cm or m?

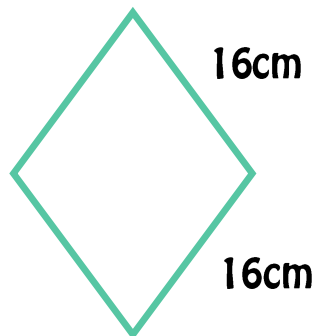
2)




3)



4)



Handy  reminder: In rectangles, the opposite sides are equal and with squares all the sides are the same length.

5)



6)



The length of each side of this shape is 4 m.