



Penguin City

The penguins in Penguin City like to be at -3°C . . . but it's not always easy for the penguins!

Colour the penguins blue if they are too cold, red if they are too hot and green if they are the right temperature.


The image shows five penguins, each with a thermometer next to it. The thermometers show the following temperatures:

- Top-left: -3°C
- Top-right: -1°C
- Middle: -6°C
- Bottom-left: -4°C
- Bottom-right: -4°C

Bernie, Ted and Marty have been enjoying a day in the sauna . . . but they've got a bit too hot! How much does each penguin need to cool down by? Marty has already been done for you.


SAUNA

Bernie = 0°C




He needs to cool down by degrees.

Ted = 2°C



He needs to cool down by degrees.


Marty = -1°C



He needs to cool down by degrees.


Penguins LOVE ice cream! But Bernie, Ted and Marty have eaten a few too many and are very cold. How much do they need to warm up by?

Bernie = -5°C




He needs to warm up by degrees.

Ted = -4°C



He needs to warm up by degrees.

Marty = -10°C



He needs to warm up by degrees.