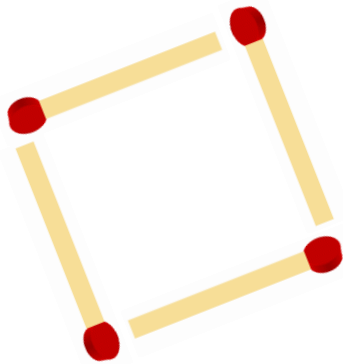




Matchstick Shapes

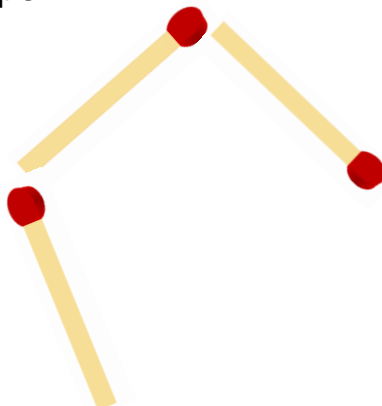
Matchsticks can be used to create different shapes.

Name the shape.

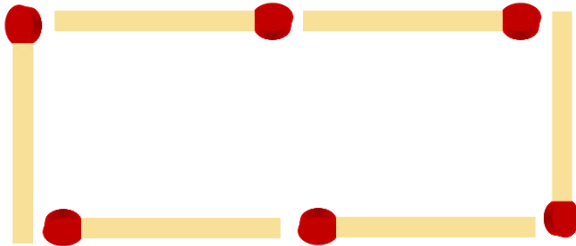


Draw and name a shape using three matchsticks.

Two matchsticks are missing. Draw in the missing matchsticks and name the completed shape.



Make this rectangle into a cuboid by drawing more matchsticks.



How many faces does the cuboid have?

How many edges?