

Bigger and Smaller Numbers

Out of the following lists of numbers, find the biggest and smallest numbers.

E.g.

8 11 2 7

Smallest = 2
Biggest = 11

Now try these examples:

1)

12 45 34 26

Smallest= 12
Biggest = 45

2)

73 52 39 48 22

Smallest= 22
Biggest = 73

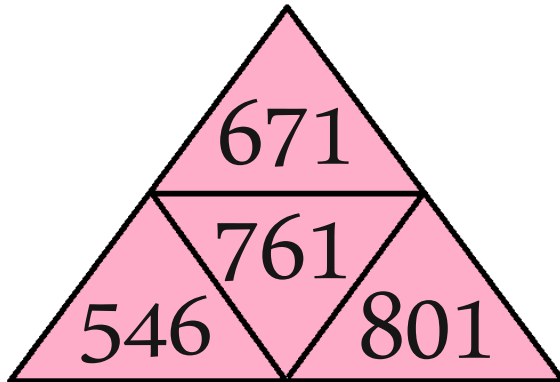
3)

99 61 82 78 65

Smallest= 61
Biggest = 99

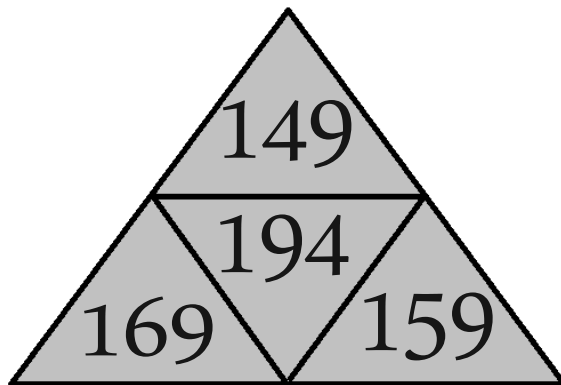
These questions are exactly the same, but the numbers are shown in a pyramid.
Find the biggest and smallest numbers.

4)



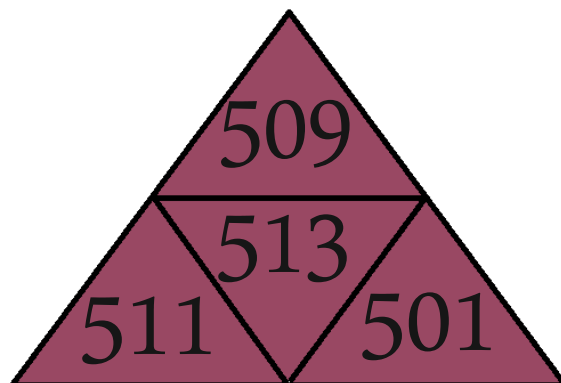
Smallest= 546
Biggest = 801

5)



Smallest= 149
Biggest = 194

6)



Smallest= 501
Biggest = 513