

## Bigger and Smaller Numbers 2

Out of the following lists of numbers, find the biggest and smallest numbers.

E.g.

8 11 2 7


Smallest = 2  
Biggest = 11

Now try these examples:

1) 12 45 34 26

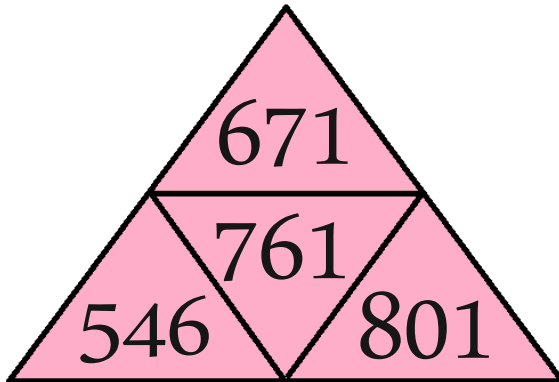
2) 73 52 39 48 22

3) 99 61 82 78 65

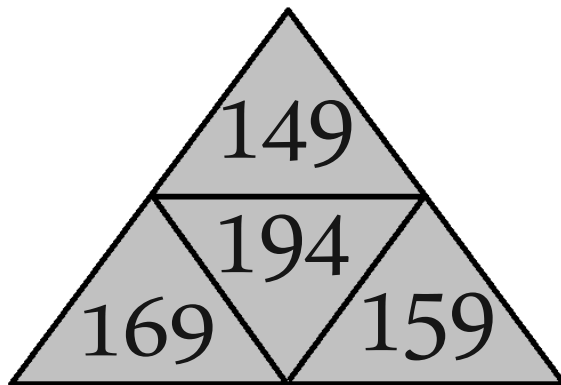
Handy   
reminder:  
You might  
find it  
helps to  
put all the  
numbers in  
order.

These questions are exactly the same, but the numbers are shown in a pyramid.  
Find the biggest and smallest numbers.

4)



5)



6)

