

Bigger and Smaller Numbers

Out of the following lists of numbers, find the biggest and smallest numbers.

E.g.

2 6 1 5


Smallest = 1
Biggest = 6

Now try these examples:

1) 8 11 2 7

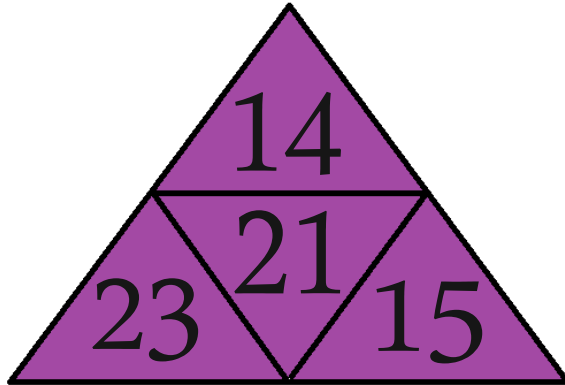
2) 3 10 4 9

3) 12 17 19 20


Handy 
reminder:
You might
find it
helps to
put all the
numbers in
order.

These questions are exactly the same, but the numbers are shown in a pyramid.
Find the biggest and smallest numbers.

4)



5)



6)

