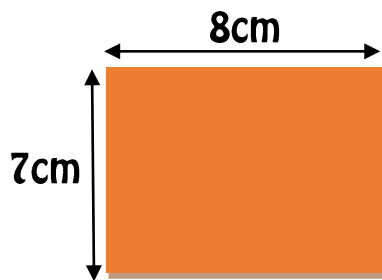


Area

Area is the size of the space inside a shape. To find the area, you need to multiply the length by the width and then write the answer as a square number.



E.g. length=8cm
width = 7cm
 $7 \times 8 = 56\text{cm}^2$

Now try these examples:

1)



Handy  Reminder:
Don't forget to put the ²
after your units.

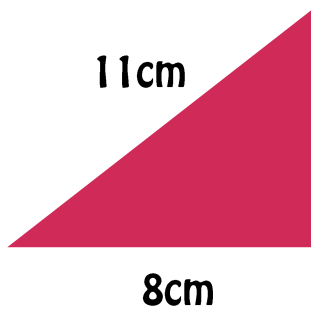
2)




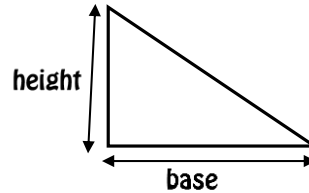
3)



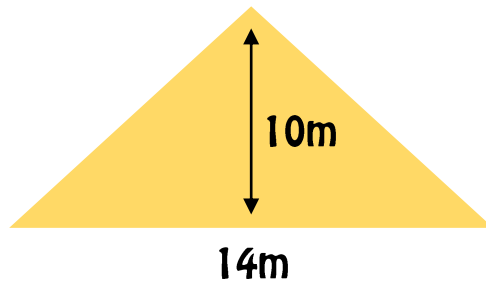
4)



Handy  reminder: When finding the area of a triangle, multiply the height by the base and divide by 2.



5)



6)

